





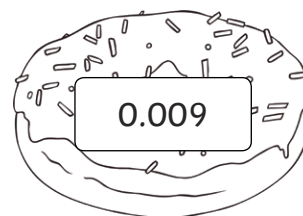


Doughnut Decimals

I can recognise thousandths and use them as decimals and fractions.



Match the decimal numbers on the doughnuts to the equivalent fraction on a mug of hot chocolate.

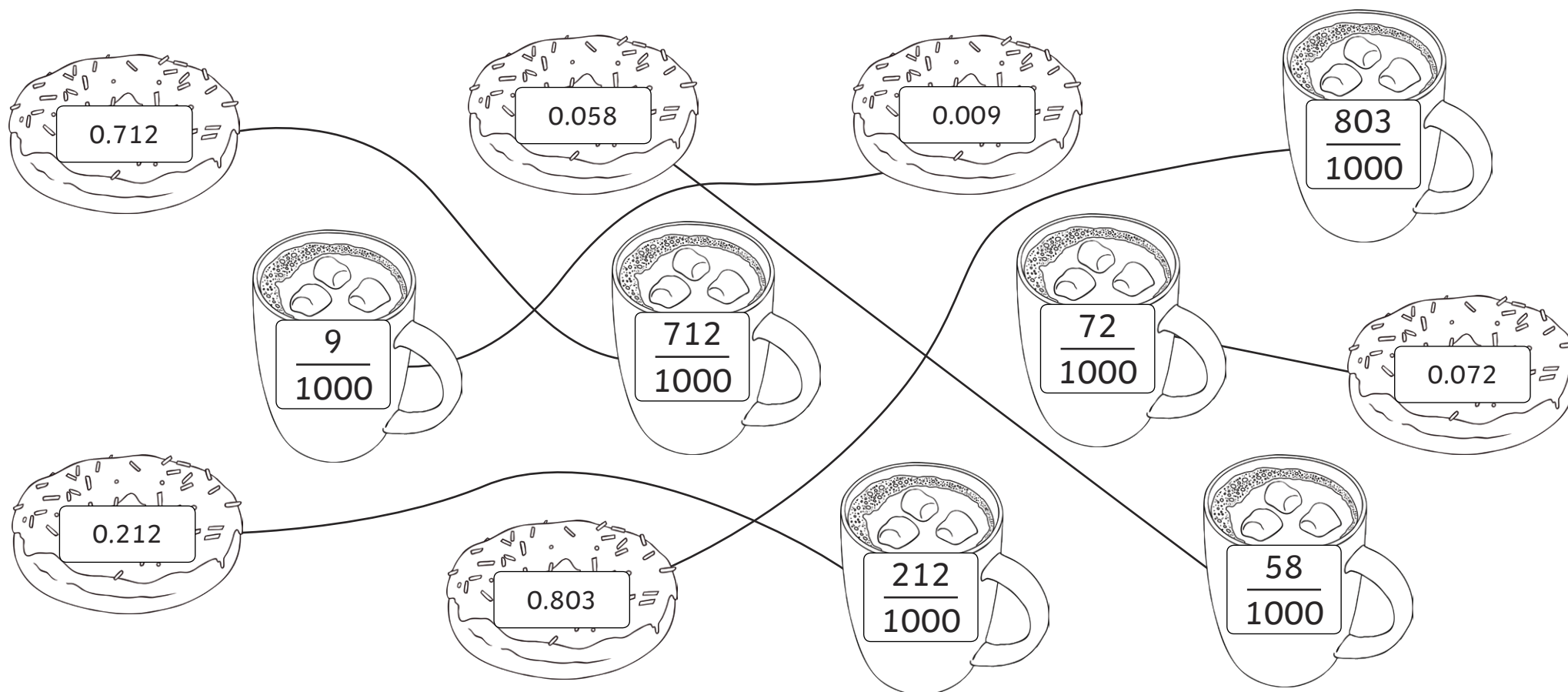




Doughnut Decimals Answers

I can recognise thousandths and use them as decimals and fractions.

Match the decimal numbers on the doughnuts to the equivalent fraction on a mug of hot chocolate.



Doughnut Decimals

I can recognise thousandths and use them as decimals and fractions.

Convert the fractions into decimals and then place them on the correct doughnut on the number line.

$$\frac{195}{1000} =$$

$$\frac{123}{1000} =$$

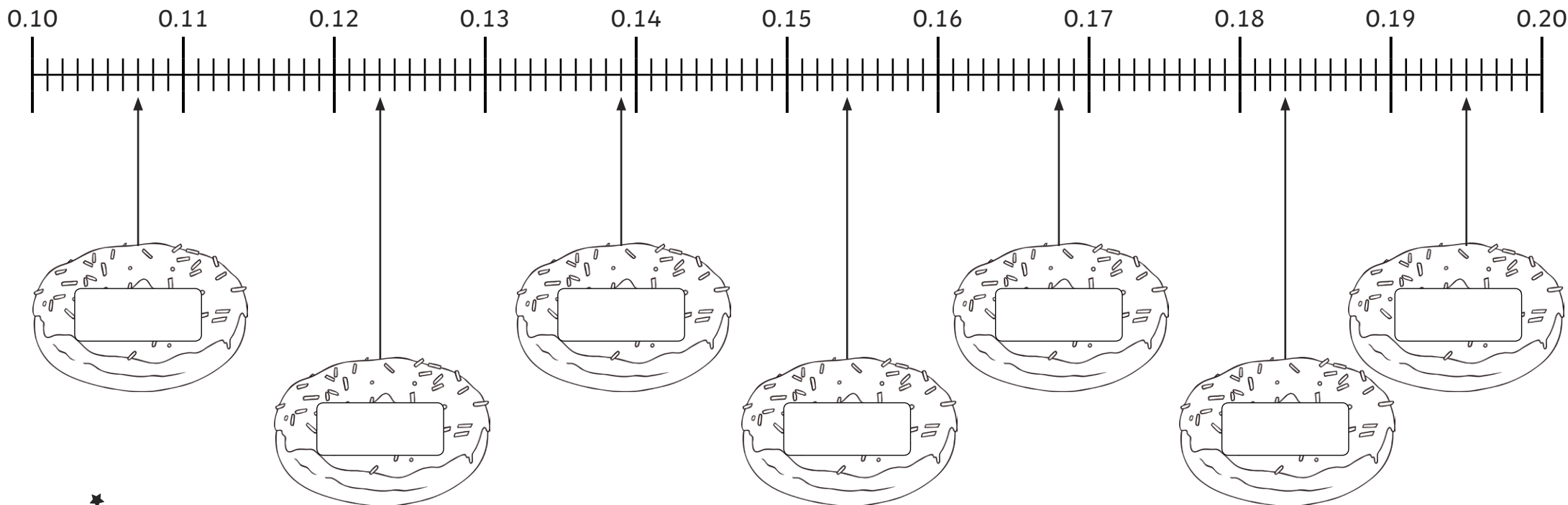
$$\frac{154}{1000} =$$

$$\frac{107}{1000} =$$

$$\frac{139}{1000} =$$

$$\frac{168}{1000} =$$

$$\frac{183}{1000} =$$



Doughnut Decimals Answers

I can recognise thousandths and use them as decimals and fractions.

Convert the fractions into decimals and then place them on the correct doughnut on the number line.

$$\frac{195}{1000} = 0.195$$

$$\frac{123}{1000} = 0.123$$

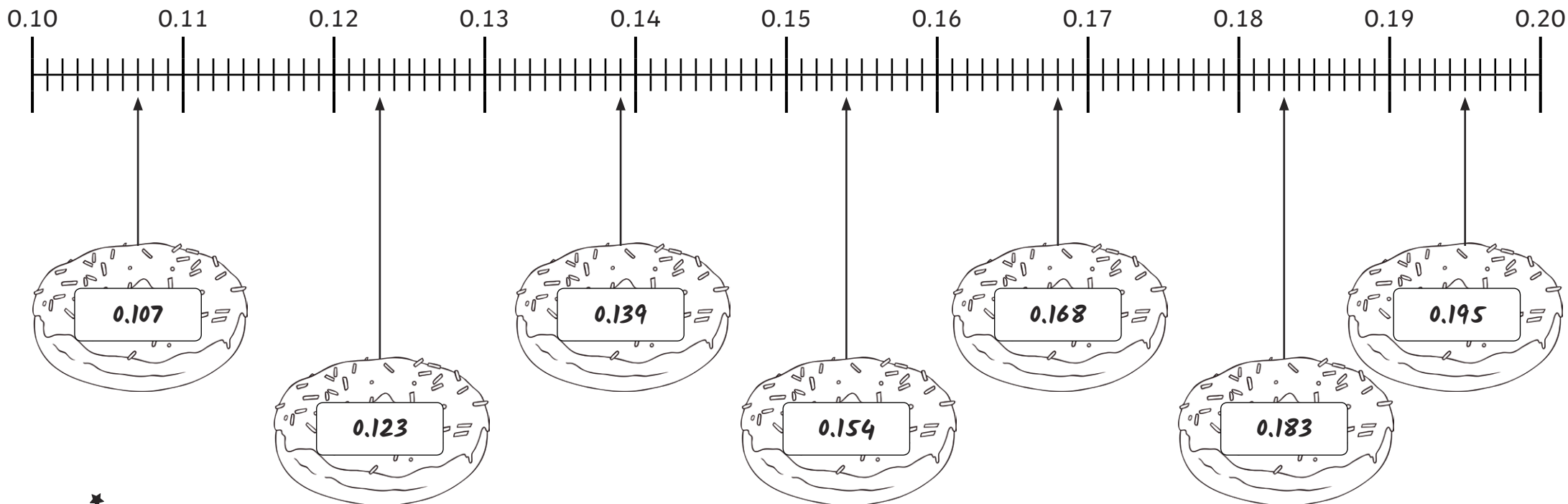
$$\frac{154}{1000} = 0.154$$

$$\frac{107}{1000} = 0.107$$

$$\frac{139}{1000} = 0.139$$

$$\frac{168}{1000} = 0.168$$

$$\frac{183}{1000} = 0.183$$














Doughnut Decimals






I can recognise thousandths and use them as decimals and fractions.









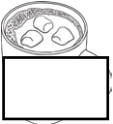



When added together, each row and column totals 1 which is equivalent to $\frac{1000}{1000}$. Write the missing decimals on the doughnuts and the missing fractions on the hot chocolates to complete each grid.



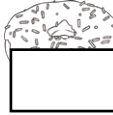


	0.319	
0.341	$\frac{343}{1000}$	
		$\frac{258}{1000}$

$\frac{537}{1000}$		
	0.246	
0.173		$\frac{492}{1000}$

	0.423	$\frac{541}{1000}$
0.705		0.103
		

	0.152	
	0.546	0.381
$\frac{173}{1000}$		

	$\frac{271}{1000}$	
0.641		0.301
$\frac{182}{1000}$		

0.309	$\frac{371}{1000}$	
		
0.208	0.511	



Doughnut Decimals Answers

I can recognise thousandths and use them as decimals and fractions.



When added together, each row and column totals 1 which is equivalent to $\frac{1000}{1000}$. Write the missing decimals on the doughnuts and the missing fractions on the hot chocolates to complete each grid.

$\frac{255}{1000}$	0.319	$\frac{426}{1000}$
0.341	$\frac{343}{1000}$	0.316
$\frac{404}{1000}$	0.338	$\frac{258}{1000}$

$\frac{537}{1000}$	0.419	$\frac{44}{1000}$
$\frac{290}{1000}$	0.246	0.464
0.173	0.335	$\frac{492}{1000}$

$\frac{36}{1000}$	0.423	$\frac{541}{1000}$
0.705	0.192	0.103
$\frac{259}{1000}$	0.385	0.356

0.754	0.152	$\frac{94}{1000}$
0.073	0.546	0.381
$\frac{173}{1000}$	0.302	$\frac{525}{1000}$

$\frac{177}{1000}$	$\frac{271}{1000}$	$\frac{552}{1000}$
0.641	0.058	0.301
$\frac{182}{1000}$	0.671	0.147

0.309	$\frac{371}{1000}$	$\frac{320}{1000}$
$\frac{483}{1000}$	0.118	0.399
0.208	0.511	$\frac{281}{1000}$